

Blowers Green Primary: School at Home **Year 2**
Friday 24th April 2020



E-mail: yeartwo@blowers.dudley.sch.uk

Good morning Class 2!

Below are your 'School at Home' tasks for today along with any links and resources which will help you to complete your home learning.

You can e-mail any questions you might have to the e-mail address above.


Some supporting materials and tasks are at the bottom (after the table below). Keep scrolling down to find them!

Good luck and well done for continuing your learning and working so hard!
We can't wait to see your work.

Mrs Potter & Miss Pylypiak-Clancy

P.S

Remember, you also have your challenges to work on.

Subject	Task
PE	<p>Warm up your bodies for the day with fun dance routine:</p> <p>https://www.youtube.com/watch?v=KVE-T2_vLpY</p>
<p>Maths</p> <p>Problem solving</p>	<p><u>Warm up your maths brain today by:</u></p> <p>Completing your times tables on times table rock stars.</p> <hr/> <p>Today we are going to use our knowledge of number to answer worded problems.</p> <p>Activities attached below. Start on Red, then Green, then Yellow. Only do as many as you can.</p> <p>Tip: Draw your tens and ones to help you. Get a grown up to read the questions to you and pick out the important numbers.</p> <p><u>Challenge:</u></p> <p>If you complete all the questions above try the challenge attached below.</p>
<p>Phonics/ SPAG</p>	<p>Correct the spelling and punctuation mistakes in one or both of the sentences below. Re-write them adding an adjective or some expanded noun phrases if you can.</p> <p>Tip: Check the word endings! Is there a missing comma anywhere?</p> <p>mrs Potter and Miss pylypiak-Clancy ar nic teachers</p> <p>Mrs Williams went shopped and bought three chocolate cakes 5 red apples and some juicy pears.</p> <p>Practise your phonics skills by clicking on a game for your phase using the link below:</p> <p>https://www.phonicsplay.co.uk</p>
<p>Writing</p> 	<p>This week we will be focusing our writing on the story of 'The Selfish Crocodile' by Faustin Charles.</p> <p>One day the selfish Crocodile was not feeling very well.</p> <p>Think of some words to describe the noises the animals in the forest could hear.</p>



moaning

groaning

Use these words in a sentence to describe the sounds the crocodile was making, think about what time of day this was too. There is a list of **time adverbials** attached below to help you.

Here is our sentence:

Early one morning, the forest animals could hear a loud moaning sound.

If you want to make it more interesting try adding a different word for 'loud'.



Challenge:

Write a simile comparing the noise to something else.

Remember: If you find this tricky finish my sentence using your phonics and kite challenge words.

The crocodile was moaning because _____.

History The Victorians



Today we would like you to find out about Victorian inventions.

Use the internet to help you research. You could start by watching this:

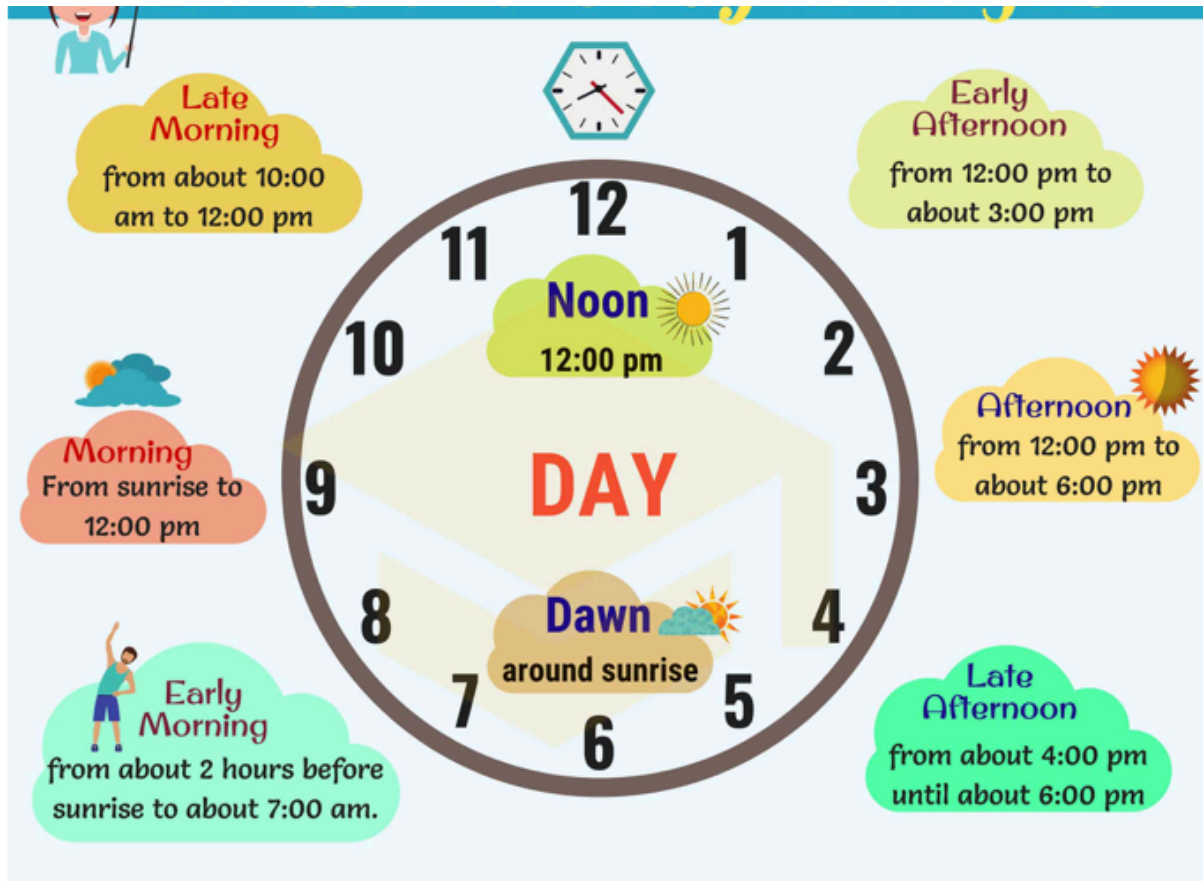
<https://vimeo.com/14027652>

Now tell me about what you have found. You could create a poster, write a list or make an invention fact book. It's up to you!

Challenge: Have you learnt about any of these inventions before? What can you remember?

If you find this too tricky, label some Victorian inventions attached below.

Time adverbials:



Maths Activity:

Red:

1. Mrs Potter has 1 ten and 3 ones. What number does she have?
2. Mrs Sehmbi has 1 ten and 9 ones. What number does she have?
3. Who has more, Mrs Potter or Mrs Sehmbi?

Green:

4. Hameez has 3 tens and 10 ones. What number does he have?
5. Lola has 4 tens and 0 ones. What number does she have?
6. Does Hameez or Lola have more? Explain your answer.

Yellow:

7. Mr Price has 4 tens and 5 ones. Mrs Williams has 2 more tens than Mr Price. What number does Mrs Williams have?
8. Joe has 9 tens and 9 ones. Katie has 8 tens and 19 ones. Who has more? Explain your answer.

Maths Challenge:

Number Detectives

Challenge Cards



Number Detectives

1. Sanjay's number has three tens and fives ones. What number does Sanjay have?

Isabelle's number has two tens more than Sanjay's number. What number does Isabelle have?



Number Detectives

2. Alex says...

My number has four tens.



Which numbers could it be? Give three examples.

Which numbers can't it be? Give three examples.

Number Detectives

3. Ava says...

You can take 100 away from any three-digit number and still have a three-digit number.



Is she correct? Explain your answer.

Number Detectives

4. Habib says...


When you add ten to any number, the ones always stay the same.



Is he right? Explain your answer.

Number Detectives

5. Faith has 27 ones and Jessica has two tens and 9 ones.



Who has the largest number? Explain your answer.

Number Detectives

6. Chen has four tens and 7 ones. He gives 20 to his friend.

He says...

I still have a number higher than 30.



Is he correct? Explain your answer.

Number Detectives

7. Isla has 32p. She gets 7 lots of 10p for her birthday.

She says...

I have more than £1.



Is she correct? Explain your answer.

Victorian Inventions:

